



BrainDumps
Collection

Cisco

200-125 Exam

Cisco CCNA Cisco Certified Network Associate CCNA (v3.0) Exam

Thank you for Downloading 200-125 exam PDF Demo

You can also try our 200-125 practice exam software

Download Free Demo

<https://www.braindumpscollection.com/200-125.html>

DEMO
VERSION

(LIMITED CONTENT)

Questions
& Answers

Version: 73.0

Question: 1

DRAG DROP

You are configuring a switch so that it accepts traffic from a maximum of two dynamic MAC addresses. Drag and drop the required configuration commands on the left into the correct sequence on the right. (Not all commands are used.)

switchport port-security maximum 2	
switchport port-security mac-address sticky	
switchport port-security mac-address 0060.3EDD.77AB	
switchport port-security mac-address 00D0.D3ED.622A	
switchport mode access	
switchport port-security	
switchport port-security violation shutdown	

Answer:

The screenshot shows the configuration commands arranged in two columns. The left column contains the commands that were available in the original interface, and the right column shows the correct sequence of commands to be applied to the switch.

switchport port-security mac-address 0060.3EDD.77AB	switchport mode access
switchport port-security mac-address 00D0.D3ED.622A	switchport port-security
switchport port-security mac-address sticky	switchport port-security maximum 2
	switchport port-security violation shutdown

Question: 2

Which value is used to build the CAM table?

- A. Source ip address
- B. Destination ip address
- C. Destination MAC address
- D. Source MAC address

Answer: D

Question: 3

Which two circumstances can prevent two routers from establishing an EIGRP neighbor adjacency ?
(Choose two.)

- A. Both routers have the same router ID
- B. The routers are on different subnets
- C. The two routers have the same autonomous system number
- D. The routers have mismatched K values.
- E. An ACL is blocking traffic from multicast address 224.0.0.5.

Answer: BD

Question: 4

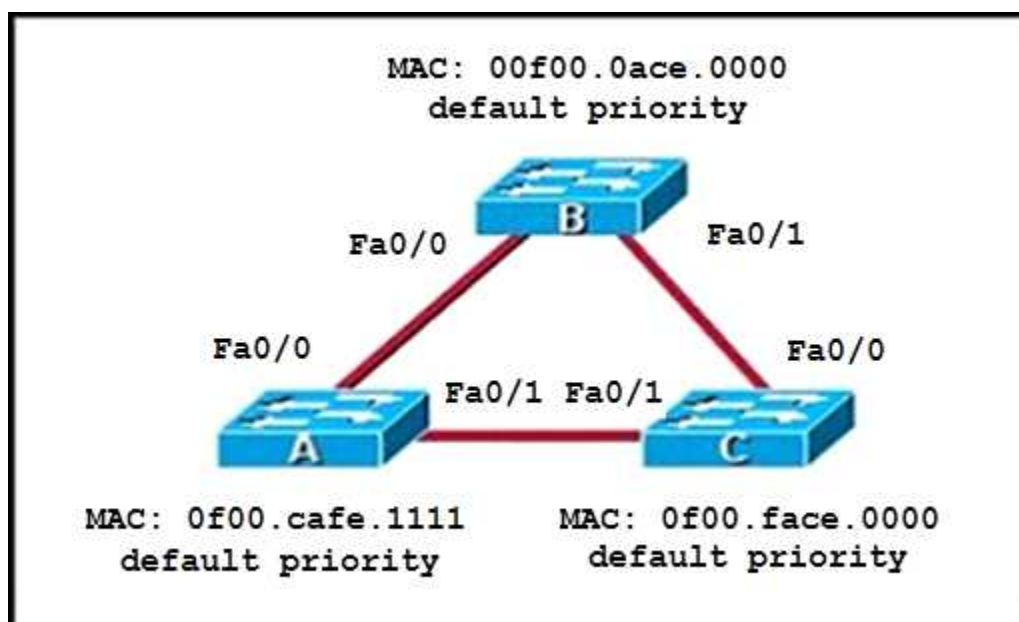
Which two steps must you perform on each device that is configured for ipv4 routing before you implement OSPFv3? (choose two)

- A. configure an autonomous system number
- B. configure a loopback interface
- C. configure a router ID
- D. enable IPv6 on an interface
- E. enable IPv6 unicast routing

Answer: C, E

Question: 5

Refer to the topology shown in the exhibit.



Which three ports will be STP designated ports if all the links are operating at the same bandwidth?
(Choose three.)

- A. Switch A -Fa0/0
- B. Switch A - Fa0/1
- C. Switch B - Fa0/0
- D. Switch B - Fa0/1
- E. Switch C - Fa0/0
- F. Switch C - Fa0/1

Answer: B, C, D

Explanation:

This question is to check the spanning tree election problem.

1. First, select the root bridge, which can be accomplished by comparing the bridge ID, the smallest will be selected. Bridge-id= bridge priority + MAC address. The three switches in the figure all have the default priority, so we should compare the MAC address, it is easy to find that SwitchB is the root bridge.
2. Select the root port on the non-root bridge, which can be completed through comparing root path cost. The smallest will be selected as the root port.
3. Next, select the Designated Port. First, compare the path cost, if the costs happen to be the same, then compare the BID, still the smallest will be selected. Each link has a DP. Based on the exhibit above, we can find DP on each link. The DP on the link between SwitchA and SwitchC is SwitchA'Fa0/1, because it has the smallest MAC address.

Question: 6

Based on the output below from SwitchB, Which Statement is True?

SwitchB# **show spanning-tree vlan 40**

VLAN0040

Spanning tree enabled protocol rstp

```

Root ID          Priority      24596
                 Address      0017.0123.4567
                 Cost        38
                 Port        11 (FastEthernet0/11)
                 Hello Time   2 sec    Max Age 20 sec    Forward Delay 15 sec
Bridge ID        Priority      28692 (priority 28652 sys-id-ext 40)
                 Address      0017.596d.1580
                 Hello Time   2 sec    Max Age 20 sec    Forward Delay 15 sec
                 Aging Time   300
  
```

Interface	Role	Sts	Cost	Prio.Nbr	Type
Fa0/11	Root	FWD	19	128.11	P2p
Fa0/12	Altn	BLK	19	128.11	P2p

- A. VLAN 40 is running the per VLAN Spanning Tree Protocol
- B. The Fa0/11 role confirms that SwitchB is the root bridge for VLAN 40
- C. SwitchB is not the root bridge, because not all of the interface roles are designated
- D. The MAC Address of the root bridge is 0017:596d.1580

Answer: C

Question: 7

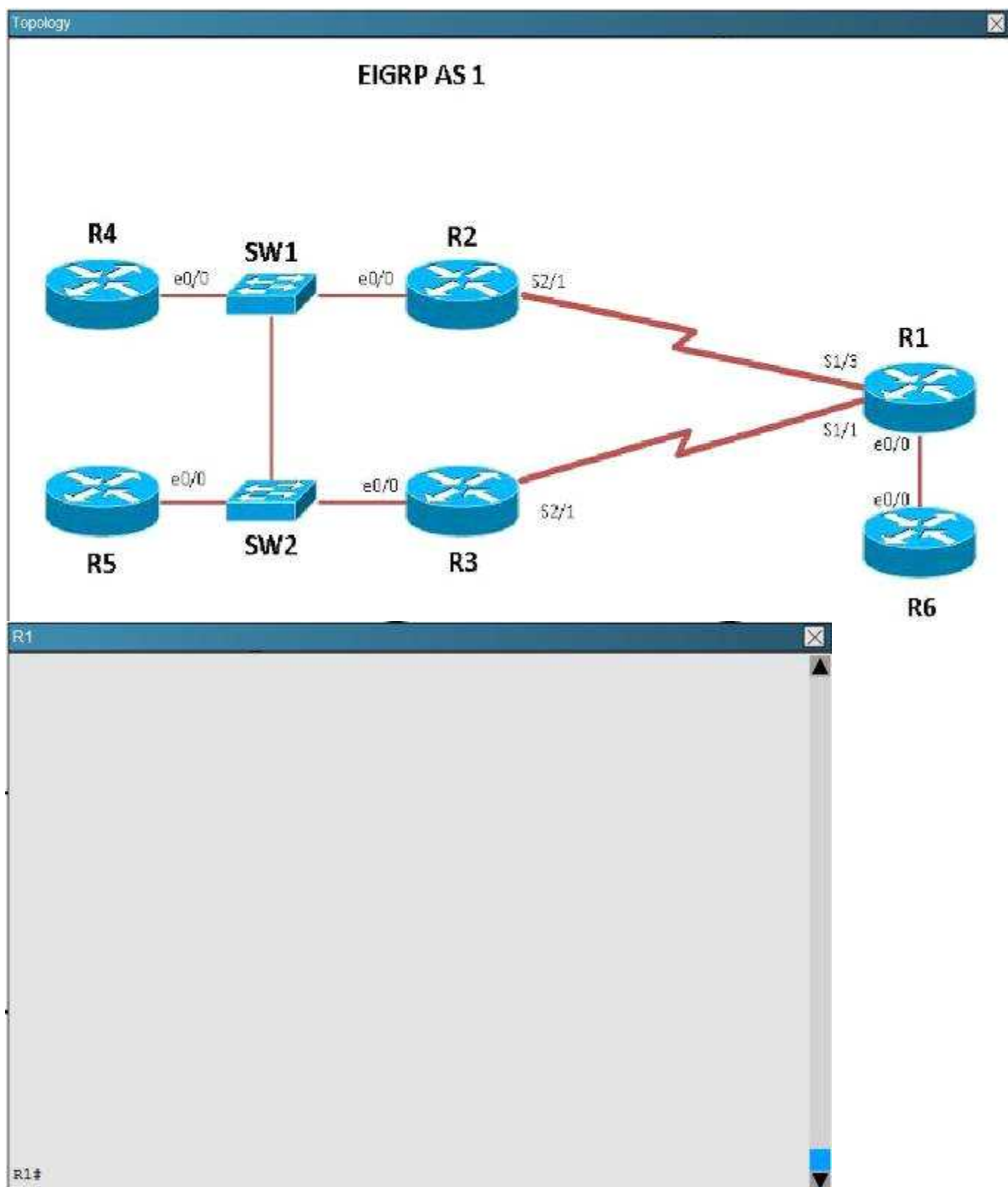
Scenario


Refer to the topology. Your company has connected the routers R1, R2, and R3 with serial links. R2 and R3 are connected to the switches SW1 and SW2, respectively. SW1 and SW2 are also connected to the routers R4 and R5.


The EIGRP routing protocol is configured.


You are required to troubleshoot and resolve the EIGRP issues between the various routers.


Use the appropriate show commands to troubleshoot the issues.











The loopback interfaces on R4 with the IP addresses of 10.4.4.4/32, 10.4.4.5/32, and 10.4.4.6/32 are not appearing in the routing table of R5. Why are the interfaces missing?

- A. The interfaces are shutdown, so they are not being advertised.
- B. R4 has been incorrectly configured to be in another AS, so it does not peer with R5.
- C. Automatic summarization is enabled, so only the 10.0.0.0 network is displayed.
- D. The loopback addresses haven't been advertised, and the network command is missing on R4.

Answer: B

Explanation:

For an EIGRP neighbor to form, the following must match:

- Neighbors must be in the same subnet
- K values
- AS numbers
- Authentication method and key strings

Here, we see that R4 is configured for EIGRP AS 2, when it should be AS 1.

R4	R5
<pre>! interface Ethernet0/2 no ip address shutdown ! interface Ethernet0/3 no ip address shutdown ! ! router eigrp 2 network 10.4.4.4 0.0.0.0 network 10.4.4.5 0.0.0.0 network 10.4.4.6 0.0.0.0 network 192.168.123.0 ! ip forward-protocol nd ! ! no ip http server no ip http secure-server ! ! ! --- More (18) ---</pre>	<pre>interface Ethernet0/2 no ip address shutdown ! interface Ethernet0/3 no ip address shutdown ! ! router eigrp 1 network 10.5.5.5 0.0.0.0 network 10.5.5.55 0.0.0.0 network 10.10.10.0 0.0.0.255 network 192.168.123.0 ! ip forward-protocol nd ! ! no ip http server no ip http secure-server ! ! ! control-plane</pre>

Question: 8

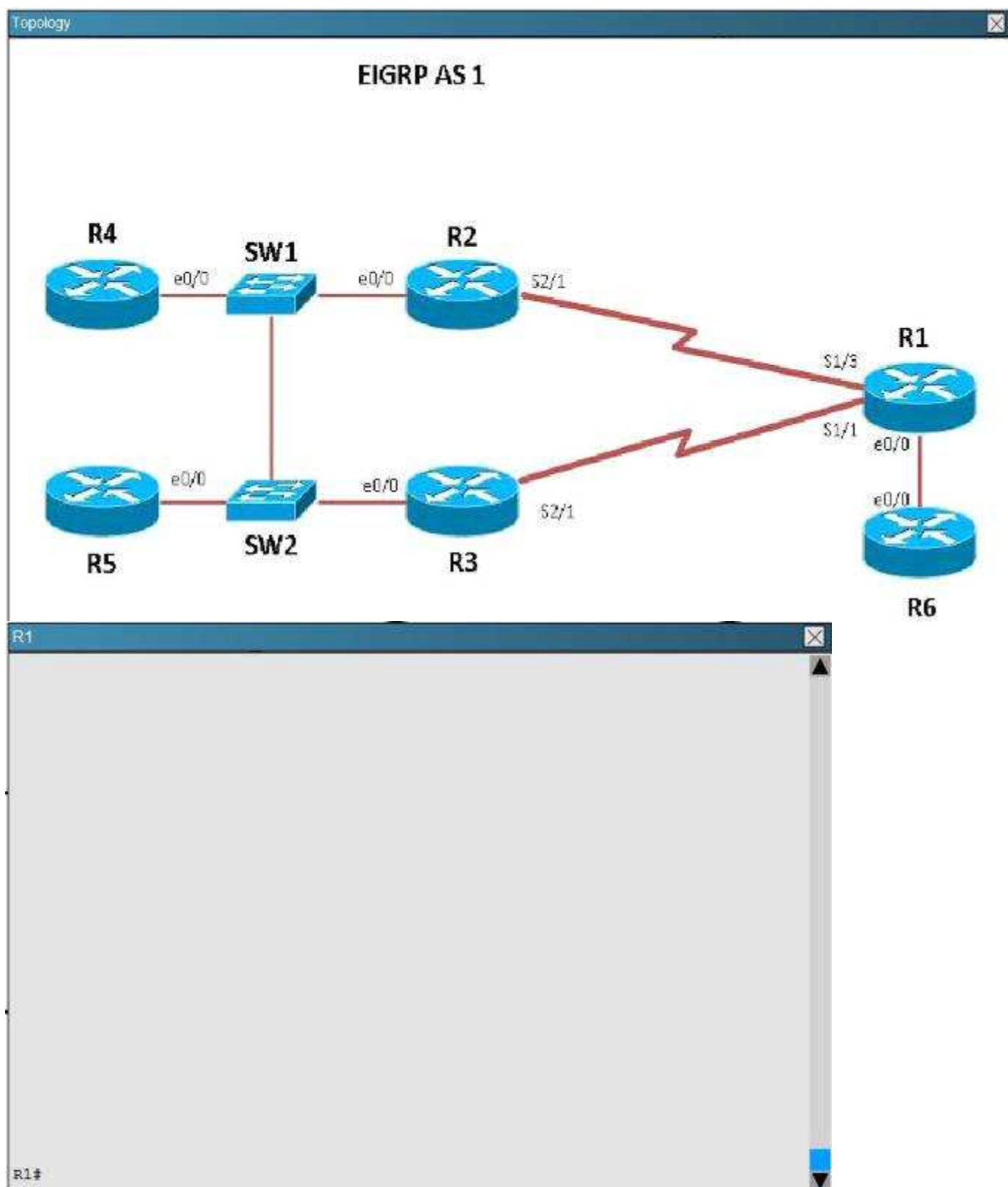
Scenario

Refer to the topology. Your company has connected the routers R1, R2, and R3 with serial links. R2 and R3 are connected to the switches SW1 and SW2, respectively. SW1 and SW2 are also connected to the routers R4 and R5.


The EIGRP routing protocol is configured.


You are required to troubleshoot and resolve the EIGRP issues between the various routers.


Use the appropriate show commands to troubleshoot the issues.











Which path does traffic take from R1 to R5?

- A. The traffic goes through R2.
- B. The traffic goes through R3.
- C. The traffic is equally load-balanced over R2 and R3.
- D. The traffic is unequally load-balanced over R2 and R3.

Answer: A

Explanation:

Using the “show ip int brief command” on R5 we can see the IP addresses assigned to this router. Then, using the “show ip route” command on R1 we can see that to reach 10.5.5.5 and 10.5.5.55 the preferred path is via Serial 1/3, which we see from the diagram is the link to R2.

<pre> R1 Codes: L - local, C - connected, S - static, R - RIP, M - mobile, B - D - EIGRP, EX - EIGRP external, O - OSPF, IA - OSPF inter area N1 - OSPF NSSA external type 1, N2 - OSPF NSSA external type 2 E1 - OSPF external type 1, E2 - OSPF external type 2 I - IS-IS, su - IS-IS summary, L1 - IS-IS level-1, L2 - IS-IS le - IS-IS inter area, * - candidate default, U - per-user sta o - ODR, P - periodic downloaded static route, H - NHRP, I - L + - replicated route, % - next hop override Gateway of last resort is not set 10.0.0.0/32 is subnetted, 5 subnets C 10.1.1.1 is directly connected, Loopback0 D 10.2.2.2 [90/2297856] via 192.168.12.1, 00:37:12, Serial1/3 D 10.3.3.3 [90/2297856] via 192.168.13.1, 00:37:12, Serial1/1 D 10.5.5.5 [90/2323456] via 192.168.12.1, 00:37:12, Serial1/3 D 10.5.5.5 [90/2323456] via 192.168.12.2, 00:37:12, Serial1/3 192.168.12.0/24 is variably subnetted, 2 subnets, 2 masks C 192.168.12.0/24 is directly connected, Serial1/3 L 192.168.12.1/32 is directly connected, Serial1/3 C 192.168.13.0/24 is variably subnetted, 2 subnets, 2 masks C 192.168.13.0/24 is directly connected, Serial1/1 L 192.168.13.1/32 is directly connected, Serial1/1 192.168.16.0/24 is variably subnetted, 2 subnets, 2 masks </pre>	<pre> R6 control-plane R6#show ip int brief Interface IP-Address OK? Method Status Prot Ethernet0/0 192.168.123.5 YES NVRAM up up Ethernet0/1 unassigned YES NVRAM administratively down down Ethernet0/2 unassigned YES NVRAM administratively down down Ethernet0/3 unassigned YES NVRAM administratively down down Loopback0 10.5.5.5 YES NVRAM up up Loopback1 10.5.5.55 YES NVRAM up up </pre>
--	---

Question: 9

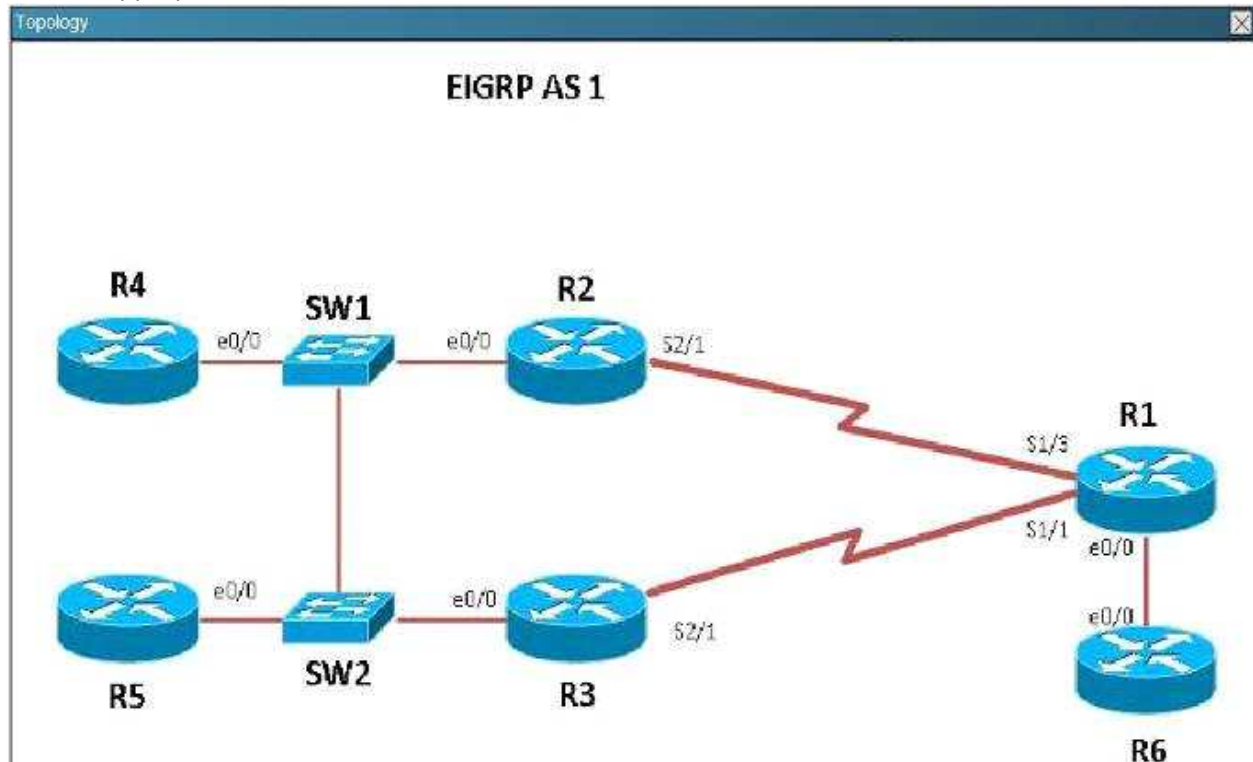
Scenario

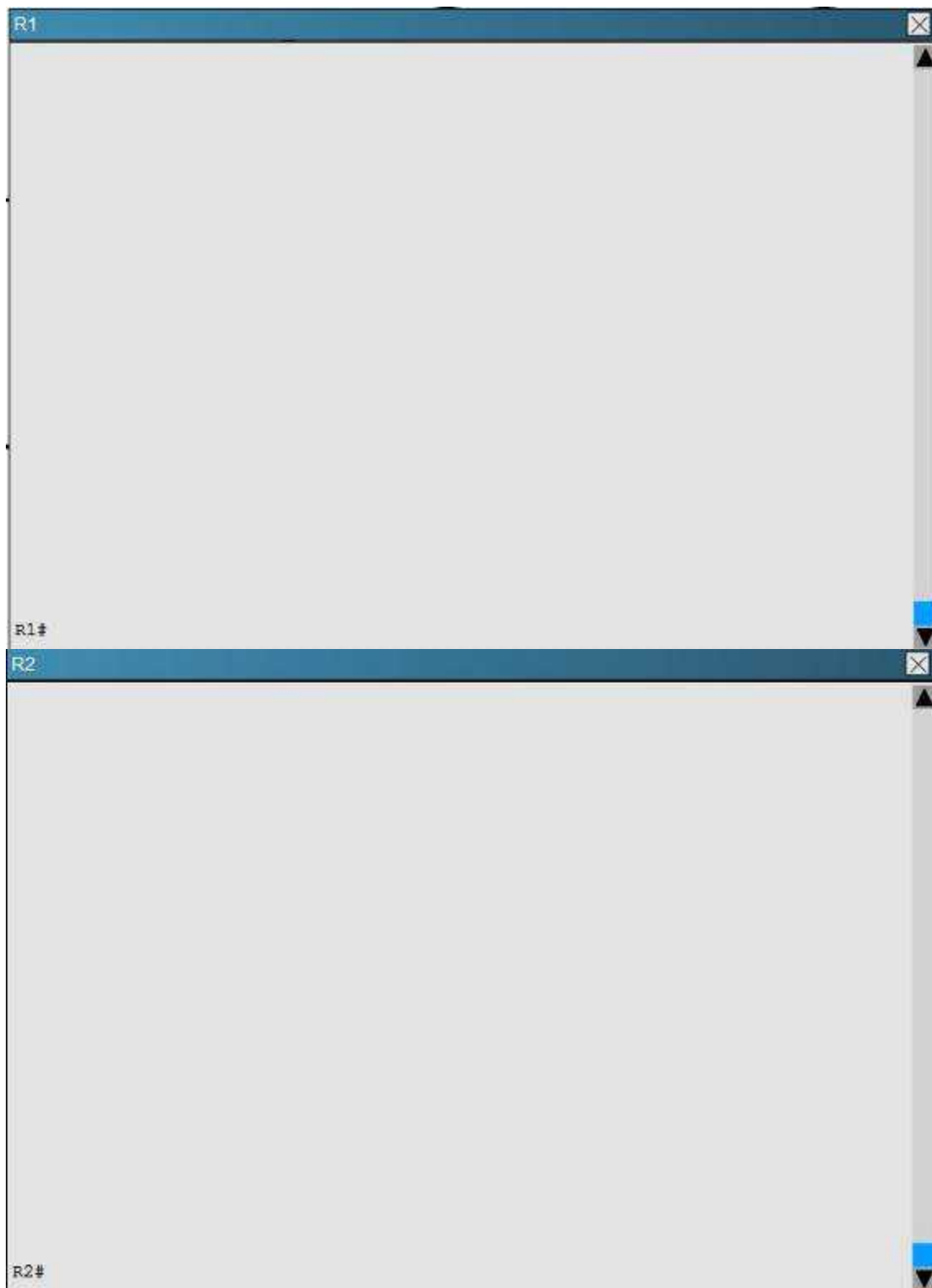
Refer to the topology. Your company has connected the routers R1, R2, and R3 with serial links. R2 and R3 are connected to the switches SW1 and SW2, respectively. SW1 and SW2 are also connected to the routers R4 and R5.


The EIGRP routing protocol is configured.


You are required to troubleshoot and resolve the EIGRP issues between the various routers.


Use the appropriate show commands to troubleshoot the issues.











Router R6 does not form an EIGRP neighbor relationship correctly with router R1. What is the cause for this misconfiguration?

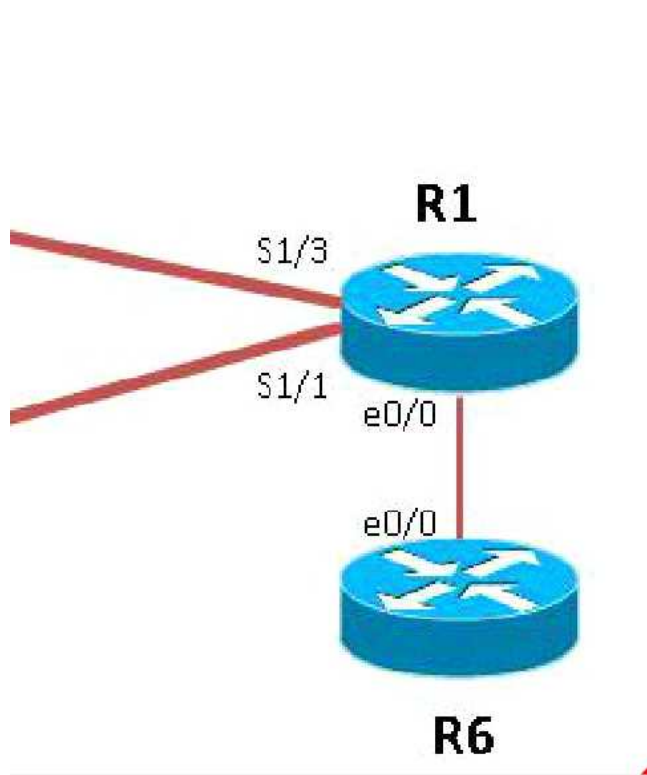
- A. The K values mismatch.
- B. The AS does not match.

- C. The network command is missing.
- D. The passive interface command is enabled.

Answer: C

Explanation:

The link from R1 to R6 is shown below:



As you can see, they are both using e0/0. The IP addresses are in the 192.168.16.0 network:

R1				R6						
Interface	IP-Address	OK?	Method	Status	Interface	IP-Address	OK?	Method	Status	Prot
ooc1					ooc1					
Ethernet0/0	192.168.16.1	YES	NVRAM	up	Ethernet0/0	192.168.16.6	YES	NVRAM	up	up
Ethernet0/1	unassigned	YES	NVRAM	adm	Ethernet0/1	unassigned	YES	NVRAM	administratively down	down
Ethernet0/2	unassigned	YES	NVRAM	adm	Ethernet0/2	unassigned	YES	NVRAM	administratively down	down
Ethernet0/3	unassigned	YES	NVRAM	adm	Ethernet0/3	unassigned	YES	NVRAM	administratively down	down
Serial1/0	unassigned	YES	NVRAM	adm	Serial1/0	unassigned	YES	NVRAM	administratively down	down
Serial1/1	192.168.13.1	YES	NVRAM	up	Serial1/1	unassigned	YES	NVRAM	up	down
Serial1/2	unassigned	YES	NVRAM	up	Serial1/2	unassigned	YES	NVRAM	administratively down	down
Serial1/3	192.168.12.1	YES	NVRAM	up	Serial1/3	unassigned	YES	NVRAM	administratively down	down
Serial2/0	unassigned	YES	NVRAM	adm	Loopback0	10.6.6.6	YES	NVRAM	up	up
Serial2/1	unassigned	YES	NVRAM	up						
Serial2/2	unassigned	YES	NVRAM	adm						
R1#					R6#					

But when we look at the EIGRP configuration, the “network 192.168.16.0” command is missing on R6.

R1	R6
<pre>shutdown serial restart-delay 0 ! interface Serial2/1 no ip address serial restart-delay 0 ! interface Serial2/2 no ip address shutdown serial restart-delay 0 ! interface Serial2/3 no ip address shutdown serial restart-delay 0 ! ! router eigrp 1 network 192.168.12.0 network 192.168.13.0 network 192.168.16.0 ! ip forward-protocol nd R1#</pre>	<pre>serial restart-delay 0 ! interface Serial1/1 no ip address serial restart-delay 0 ! interface Serial1/2 no ip address shutdown serial restart-delay 0 ! interface Serial1/3 no ip address shutdown serial restart-delay 0 ! ! router eigrp 1 network 10.6.6.6 0.0.0.0 ! ip forward-protocol nd ! no ip http server R6#</pre>

Question: 10

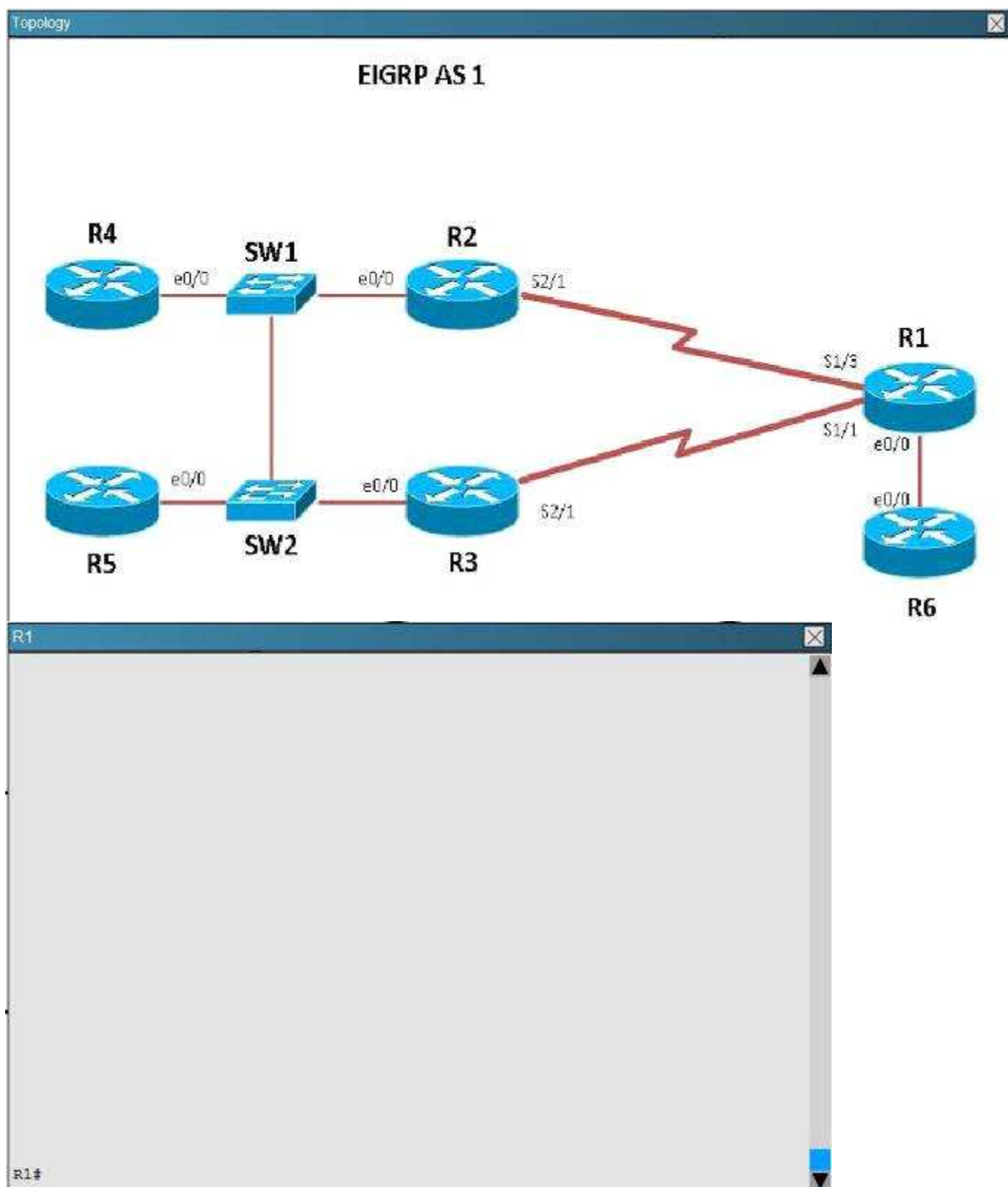
Scenario

Refer to the topology. Your company has connected the routers R1, R2, and R3 with serial links. R2 and R3 are connected to the switches SW1 and SW2, respectively. SW1 and SW2 are also connected to the routers R4 and R5.


The EIGRP routing protocol is configured.


You are required to troubleshoot and resolve the EIGRP issues between the various routers.


Use the appropriate show commands to troubleshoot the issues.











Study the following output taken on R1:

```
R1# Ping 10.5.5.55 source 10.1.1.1
```

```
Type escape sequence to abort.
```

```
Sending 5, 100-byte ICMP Echos to 10.5.5.55, timeout is 2 seconds:
```

```
Packet sent with a source address of 10.1.1.1
```

```
.....
```

```
Success rate is 0 percent (0/5)
```

```
Why are the pings failing?
```

- A. The network statement is missing on R5.
- B. The loopback interface is shut down on R5.
- C. The network statement is missing on R1.
- D. The IP address that is configured on the Lo1 interface on R5 is incorrect.

Answer: C

Explanation:

R5 does not have a route to the 10.1.1.1 network, which is the loopback0 IP address of R1. When looking at the EIGRP configuration on R1, we see that the 10.1.1.1 network statement is missing on R1.

R1

```
no ip address
serial restart-delay 0
!
interface Serial2/2
no ip address
shutdown
serial restart-delay 0
!
interface Serial2/3
no ip address
shutdown
serial restart-delay 0
!
!
router eigrp 1
network 192.168.12.0
network 192.168.13.0
network 192.168.16.0
!
ip forward-protocol nd
!
!
no ip http server
no ip http secure-server
```

R1#

Thank You for trying 200-125 PDF Demo

To try our 200-125 practice exam software visit link below

<https://www.braindumpscollection.com/200-125.html>

Start Your 200-125 Preparation

Use Coupon "20OFF" for extra 20% discount on the purchase of Practice Test Software. Test your 200-125 preparation with actual exam questions.